




Consolidate 2, 4 and 8 times-tables

White Rose Maths


1 How many legs are there altogether?
Complete the multiplications


a)  $5 \times 2 = 10$ ✓


b)  $3 \times 4 = 12$ ✓


c)  $4 \times 8 = 32$ ✓

2 How many pencils are there?
Complete the multiplications.

a)  $9 \times 2 = 18$ ✓

b)  $5 \times 4 = 20$ ✓

c)  $8 \times 8 = 64$ ✓

3 A paper clip is 3 cm long. 


a) What is the total length of 2 paper clips?
 $3 \times 2 = 6$ cm ✓

b) What is the total length of 4 paper clips?
 $3 \times 4 = 12$ cm ✓

c) What is the total length of 8 paper clips?
 $3 \times 8 = 24$ cm ✓

4 Complete the multiplications.

| | | |
|---------------------|---------------------|---------------------|
| a) $1 \times 2 = 2$ | b) $1 \times 4 = 4$ | c) $1 \times 8 = 8$ |
| $2 \times 2 = 4$ | $2 \times 4 = 8$ | $2 \times 8 = 16$ |
| $3 \times 2 = 6$ | $3 \times 4 = 12$ | $3 \times 8 = 24$ |
| $4 \times 2 = 8$ | $4 \times 4 = 16$ | $4 \times 8 = 32$ |
| $5 \times 2 = 10$ | $5 \times 4 = 20$ | $5 \times 8 = 40$ |

What do you notice? 

© White Rose Maths 2020

Scan with Seesaw to view this work!

